

Groups of Ten

 **Check Understanding**

Describe 50 using the words *groups of ten* and *ones*.


What You Need

- Recording Sheet

What You Do

1. Take turns. Pick a picture on the **Recording Sheet**.
2. Read the math sentences.
3. Draw a line from the picture to a matching math sentence.
4. Your partner checks your answer.

4 tens is 40.

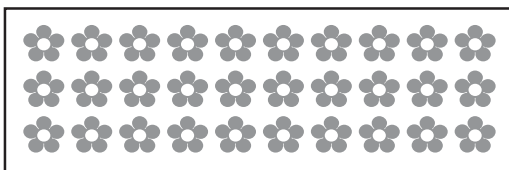
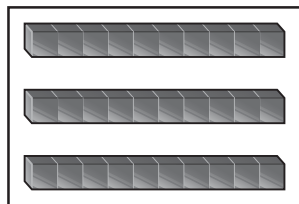
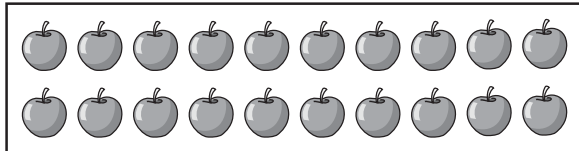
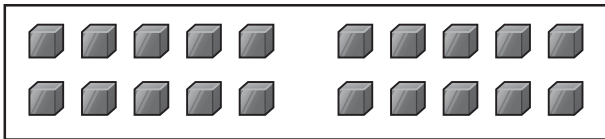

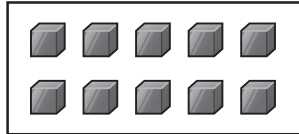


Go Further!

Look at the pictures of 2 tens and 20 ones.
Tell your partner how they are the same.

Groups of Ten

Picture



Math Sentence

5 groups of 10
is 50.

2 groups of 10
is 20.

10 is 10 ones.

3 groups of 10
is 3 tens.

20 is 2 groups
of 10.

30 is 3 groups
of 10.

Groups of Ten

What You Need

- Recording Sheet


Check Understanding

Describe 60 two different ways using the words *groups of ten* and *ones*.

What You Do

1. Take turns. Pick a math sentence on the **Recording Sheet**.
2. Look at the pictures.
3. Draw a line from the math sentence to a matching picture.
4. Your partner checks your work.

4 tens is 40.



Go Further!

Find the picture that shows 2 tens.
Find another picture that matches.
Tell your partner why they match.

Groups of Ten

Math Sentence

7 groups of 10
is 70.

2 groups of 10
is 20.

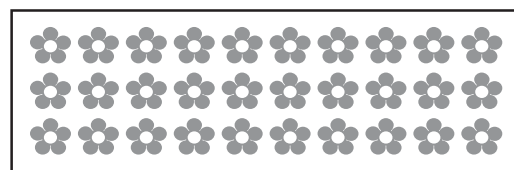
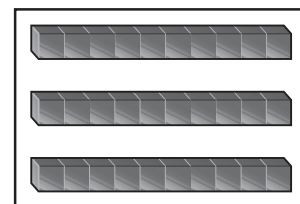
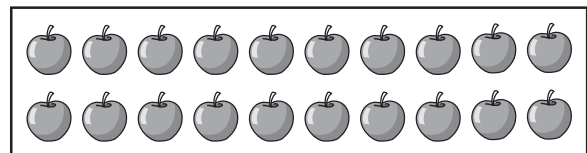
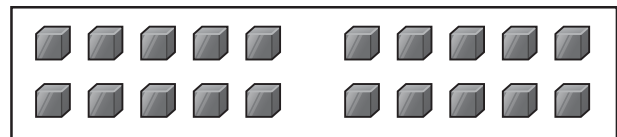

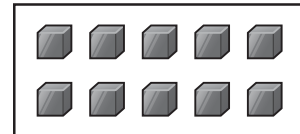
10 is 10 ones.

3 groups of 10
is 3 tens.

20 is 2 groups
of 10.

30 is 3 groups
of 10.

Picture



Groups of Ten

 **Check Understanding**

Describe 30 using the words *groups of ten*.


What You Need

- Recording Sheet

What You Do

1. Take turns. Pick a picture on the **Recording Sheet**.
2. Read the math sentences.
3. Draw a line from the picture to a matching math sentence.
4. Your partner checks your answer.

4 tens is 40.


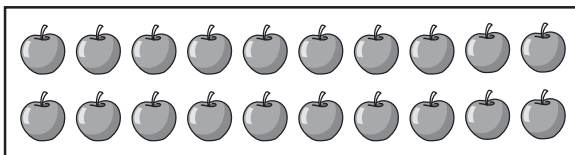
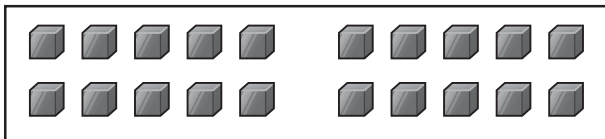

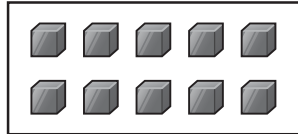


Go Further!

Look at the pictures of 2 tens and 20 ones.
Tell your partner how they are the same.

Groups of Ten

Picture



Math Sentence

5 groups of 10
is 50.

2 groups of 10
is 20.

10 is 10 ones.

20 is 2 groups
of 10.

30 is 30 ones.

Center Activity 1.21 Answer Key

Groups of Ten

★ Below Level

Check Understanding

30 is 3 groups of 10.

Recording Sheet

Picture	Math Sentence
	5 groups of 10 is 50.
	2 groups of 10 is 20.
	10 is 10 ones.
	20 is 2 groups of 10.
	30 is 30 ones.

★★ On Level

Check Understanding

Sample responses: 5 groups of 10 is 50; 50 is 50 ones.

Recording Sheet

Picture	Math Sentence
	5 groups of 10 is 50.
	2 groups of 10 is 20.
	10 is 10 ones.
	3 groups of 10 is 3 tens.
	20 is 2 groups of 10.
	30 is 3 groups of 10.

★★★ Above Level

Check Understanding

Sample responses: 6 groups of 10 is 60; 5 tens and 10 ones is 60.

Recording Sheet

Math Sentence	Picture
7 groups of 10 is 70.	
2 groups of 10 is 20.	
10 is 10 ones.	
3 groups of 10 is 3 tens.	
20 is 2 groups of 10.	
30 is 3 groups of 10.	